











Name \_\_\_\_\_

Date \_\_\_\_\_













## ADDITION & SUBTRACTION PROBLEMS TO 20 SHEET 2

		WORKING OUT
1)	<p>There are 5  in a pond.</p> <p>13 more  jump in.</p> <p>How many are there now? _____</p>	
2)	<p>I have \$18.</p> <p>I spend \$10.</p> <p>How much money is left? \$ _____</p>	
3)	<p>I buy 4  on Monday.</p> <p>I buy 7  on Tuesday.</p> <p>I buy 5  on Wednesday.</p> <p>How many do I have now? _____</p>	
4)	<p>A shop has 20  .</p> <p>15  are sold.</p> <p>What is 20 minus 15? _____</p>	
5)	<p>There are 12  .</p> <p>7 more  come along.</p> <p>How many  altogether? _____</p>	



# ADDITION & SUBTRACTION PROBLEMS TO 20

## SHEET 2 ANSWERS

		WORKING OUT
1)	<p>There are 5  in a pond.</p> <p>13 more  jump in.</p> <p>How many are there now? <u>18</u></p>	<u><math>5 + 13 = 18</math></u>
2)	<p>I have \$18.</p> <p>I spend \$10.</p> <p>How much money is left? \$ <u>8</u></p>	<u><math>18 - 10 = 8</math></u>
3)	<p>I buy 4  on Monday.</p> <p>I buy 7  on Tuesday.</p> <p>I buy 5  on Wednesday.</p> <p>How many do I have now? <u>16</u></p>	<u><math>4 + 7 + 5 = 16</math></u>
4)	<p>A shop has 20 .</p> <p>15  are sold.</p> <p>What is 20 minus 15? <u>5</u></p>	<u><math>20 - 15 = 5</math></u>
5)	<p>There are 12 .</p> <p>7 more  come along.</p> <p>How many  altogether? <u>19</u></p>	<u><math>12 + 7 = 19</math></u>