













ADDITION & SUBTRACTION PROBLEMS TO 20 SHEET 2UK

		WORKING OUT
1)	<p>There are 5  in a pond.</p> <p>13 more  jump in.</p> <p>How many are there now? _____</p>	
2)	<p>I have £18.</p> <p>I spend £10.</p> <p>How much money is left? £ _____</p>	
3)	<p>I buy 4  on Monday.</p> <p>I buy 7  on Tuesday.</p> <p>I buy 5  on Wednesday.</p> <p>How many do I have now? _____</p>	
4)	<p>A shop has 20 .</p> <p>15  are sold.</p> <p>What is 20 minus 15? _____</p>	
5)	<p>There are 12 .</p> <p>7 more  come along.</p> <p>How many  altogether? _____</p>	











Name

Date



ADDITION & SUBTRACTION PROBLEMS TO 20

SHEET 2UK ANSWERS

		WORKING OUT
1)	<p>There are 5  in a pond.</p> <p>13 more  jump in.</p> <p>How many are there now? <u>18</u></p>	<u>$5 + 13 = 18$</u>
2)	<p>I have £18.</p> <p>I spend £10.</p> <p>How much money is left? £ <u>8</u></p>	<u>$18 - 10 = 8$</u>
3)	<p>I buy 4  on Monday.</p> <p>I buy 7  on Tuesday.</p> <p>I buy 5  on Wednesday.</p> <p>How many do I have now? <u>16</u></p>	<u>$4 + 7 + 5 = 16$</u>
4)	<p>A shop has 20 .</p> <p>15  are sold.</p> <p>What is 20 minus 15? <u>5</u></p>	<u>$20 - 15 = 5$</u>
5)	<p>There are 12 .</p> <p>7 more  come along.</p> <p>How many  altogether? <u>19</u></p>	<u>$12 + 7 = 19$</u>