


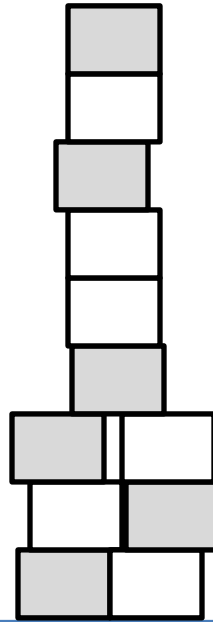


PROBLEM SOLVING - SALAMANDER TOWERS

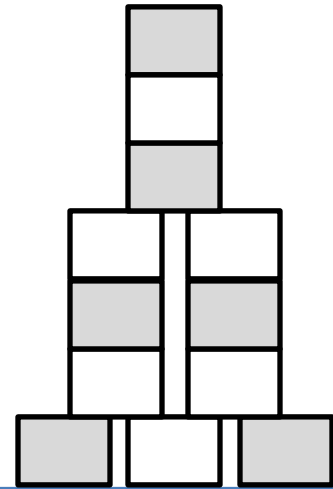
Captain Salamander, Flame and Tyger all build towers out of bricks. Here they are below.



Captain's tower



Flame's tower



Tyger's tower




- 1) Whose tower is the tallest? _____
- 2) How many bricks are there in Tyger's tower? ____ bricks
- 3) How many bricks are there in the Captain's tower? ____ bricks
- 4) How many bricks are there in Flame's tower? ____ bricks
- 5) How many bricks tall is the Captain's tower? ____ bricks
- 6) How many bricks taller is Flamer's tower than the Captain's tower? _____ bricks

Name

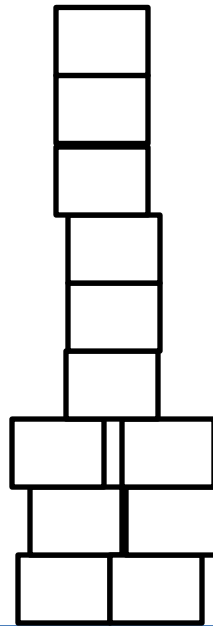
Date



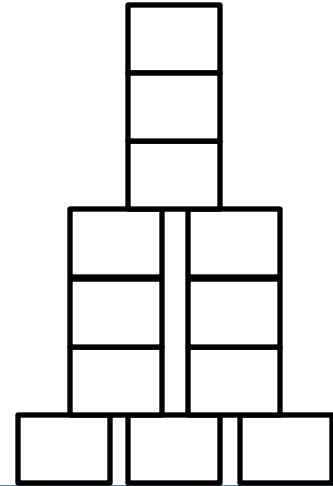
PROBLEM SOLVING - SALAMANDER TOWERS ANSWERS



Captain's tower



Flame's tower



Tyger's tower



- 1) Whose tower is the tallest? **Flame's tower**
- 2) How many bricks are there in Tyger's tower? **12 bricks**
- 3) How many bricks are there in the Captain's tower? **17 bricks**
- 4) How many bricks are there in Flame's tower? **12 bricks**
- 5) How many bricks tall is the Captain's tower? **6 bricks**
- 6) How many bricks taller is Flamer's tower than the Captain's tower? **3 bricks**