































SUBTRACTION PROBLEMS TO 10 SHEET 2

	WORKING OUT
1) I see 6  . 3  hop away. How many  are left? _____	
2) Bert has 8  . Bob has 4  . What is the difference? _____	
3) There are 7  . 4  pop. How many are left? _____	
4) I pick 9  . I eat 2 of them. How many  are left? _____	
5) Tyger has 5  . Frazer has 4  . How many more  does Tyger have? _____	
6) There are 10  . 3  hop away. What is 10 minus 3? _____	



SUBTRACTION PROBLEMS TO 10 SHEET 2 ANSWERS

	WORKING OUT
1) I see 6  . 3  hop away. How many  are left? <u>3</u>	<u>$6 - 3 = 3$</u>
2) Bert has 8  . Bob has 4  . What is the difference? <u>4</u>	<u>$8 - 4 = 4$</u>
3) There are 7  . 4  pop. How many are left? <u>3</u>	<u>$7 - 4 = 3$</u>
4) I pick 9  . I eat 2 of them. How many  are left? <u>7</u>	<u>$9 - 2 = 7$</u>
5) Tyger has 5  . Frazer has 4  . How many more  does Tyger have? <u>1</u>	<u>$5 - 4 = 1$</u>
6) There are 10  . 3  hop away. What is 10 minus 3? <u>7</u>	<u>$10 - 3 = 7$</u>