















Name _____

Date _____

















SUBTRACTION PROBLEMS TO 10 SHEET 3

	WORKING OUT
1) I have 9  . I eat 6  . How many  are left? _____	
2) Sally has 8¢. Tyger has 3¢. What is the difference? _____ ¢	
3) There are 10  . 5  swim away. What is 10 minus 5? _____	
4) I see 7  . 5  fly away. How many  are left? _____	
5) Captain wants 9  . He has 6  . How many more  does he need? _____	
6) There are 10  in a shop. 6  are eaten. How many  are left? _____	



SUBTRACTION PROBLEMS TO 10 SHEET 3 ANSWERS

	WORKING OUT
1) I have 9  . I eat 6  . How many  are left? <u>3</u>	$\underline{9 - 6 = 3}$
2) Sally has 8¢. Tyger has 3¢. What is the difference? <u>5</u> ¢	$\underline{8 - 3 = 5}$
3) There are 10  . 5  swim away. What is 10 minus 5? <u>5</u>	$\underline{10 - 5 = 5}$
4) I see 7  . 5  fly away. How many  are left? <u>2</u>	$\underline{7 - 5 = 2}$
5) Captain wants 9  . He has 6  . How many more  does he need? <u>3</u>	$\underline{9 - 6 = 3}$
6) There are 10  in a shop. 6  are eaten. How many  are left? <u>4</u>	$\underline{10 - 6 = 4}$