













Name

Date

















## SUBTRACTION PROBLEMS TO 10 SHEET 3UK

	WORKING OUT
<p>1) I have 9 .</p> <p>I eat 6 .</p> <p>How many  are left? _____</p>	
<p>2) Sally has £8.</p> <p>Tyger has £3.</p> <p>What is the difference? £ _____</p>	
<p>3) There are 10 .</p> <p>5  swim away.</p> <p>What is 10 minus 5? _____</p>	
<p>4) I see 7 .</p> <p>5  fly away.</p> <p>How many  are left? _____</p>	
<p>5) Captain wants 9 .</p> <p>He has 6 .</p> <p>How many more  does he need? _____</p>	
<p>6) There are 10  in a shop.</p> <p>6  are eaten.</p> <p>How many  are left? _____</p>	



## SUBTRACTION PROBLEMS TO 10 SHEET 3UK ANSWERS

	WORKING OUT
1) I have 9  . I eat 6  . How many  are left? <u>3</u>	<u><math>9 - 6 = 3</math></u>
2) Sally has £8. Tyger has £3. What is the difference? £ <u>5</u>	<u><math>8 - 3 = 5</math></u>
3) There are 10  . 5  swim away. What is 10 minus 5? <u>5</u>	<u><math>10 - 5 = 5</math></u>
4) I see 7  . 5  fly away. How many  are left? <u>2</u>	<u><math>7 - 5 = 2</math></u>
5) Captain wants 9  . He has 6  . How many more  does he need? <u>3</u>	<u><math>9 - 6 = 3</math></u>
6) There are 10  in a shop. 6  are eaten. How many  are left? <u>4</u>	<u><math>10 - 6 = 4</math></u>