

















SUBTRACTION PROBLEMS TO 15 SHEET 1

	WORKING OUT
<p>1) There are 12 .</p> <p>3  are eaten.</p> <p>How many are left? _____</p>	
<p>2) I have 10¢.</p> <p>I spend 2¢.</p> <p>How much money do I have now? _____ ¢</p>	
<p>3) There are 11  in a shop.</p> <p>4  get sold.</p> <p>What is 11 minus 4? _____</p>	
<p>4) Tyger has 9 .</p> <p>Sally has 7 .</p> <p>What is the difference? _____</p>	
<p>5) There are 13 .</p> <p>3  pop.</p> <p>How many  are left? _____</p>	
<p>6) There are 12 .</p> <p>5  hop away.</p> <p>How many  are left? _____</p>	



SUBTRACTION PROBLEMS TO 15 SHEET 1 ANSWERS

	WORKING OUT
1) There are 12  . 3  are eaten. How many are left? <u>9</u>	<u>$12 - 3 = 9$</u>
2) I have 10¢. I spend 2¢. How much money do I have now? <u>8 ¢</u>	<u>$10 - 2 = 8$</u>
3) There are 11  in a shop. 4  get sold. What is 11 minus 4? <u>7</u>	<u>$11 - 4 = 7$</u>
4) Tyger has 9  . Sally has 7  . What is the difference? <u>2</u>	<u>$9 - 7 = 2$</u>
5) There are 13  . 3  pop. How many  are left? <u>10</u>	<u>$13 - 3 = 10$</u>
6) There are 12  . 5  hop away. How many  are left? <u>7</u>	<u>$12 - 5 = 7$</u>