













Name _____

Date _____



SUBTRACTION PROBLEMS TO 15 SHEET 1UK













	WORKING OUT
1) There are 12  . 3  are eaten. How many are left? _____	
2) I have £10. I spend £2. How much money do I have left? £ _____	
3) There are 11  in a shop. 4  get sold. What is 11 minus 4? _____	
4) Tyger has 9  . Sally has 7  . What is the difference? _____	
5) There are 13  . 3  pop. How many  are left? _____	
6) There are 12  . 5  hop away. How many  are left? _____	

Name

Date



SUBTRACTION PROBLEMS TO 15 SHEET 1UK ANSWERS

	WORKING OUT
1) There are 12  . 3  are eaten. How many are left? <u>9</u>	$\underline{12 - 3 = 9}$
2) I have £10. I spend £2. How much money do I have left? £ <u>8</u>	$\underline{10 - 2 = 8}$
3) There are 11  in a shop. 4  get sold. What is 11 minus 4? <u>7</u>	$\underline{11 - 4 = 7}$
4) Tyger has 9  . Sally has 7  . What is the difference? <u>2</u>	$\underline{9 - 7 = 2}$
5) There are 13  . 3  pop. How many  are left? <u>10</u>	$\underline{13 - 3 = 10}$
6) There are 12  . 5  hop away. How many  are left? <u>7</u>	$\underline{12 - 5 = 7}$