













Name

Date















## SUBTRACTION PROBLEMS TO 15 SHEET 3

	WORKING OUT
1) There are 13  in a shop. 5  are sold. How many are left? _____	
2) Captain sees 12  . Tyger sees 7  . What is the difference? _____	
3) There are 15  . 10  slither away. What is 15 minus 10? _____	
4) I buy 13  . I eat 9  . How many do I have now? _____	
5) Sally catches 12  . Frazer catches 9  . How many more has Sally got? _____	
6) There are 14  . 3  blow away. How many are left? _____	



# SUBTRACTION PROBLEMS TO 15 SHEET 3 ANSWERS

	WORKING OUT
1) There are 13  in a shop. 5  are sold. How many are left? <u>      </u>	$\underline{13 - 5 = 8}$
2) Captain sees 12  . Tyger sees 7  . What is the difference? <u>5</u>	$\underline{12 - 7 = 5}$
3) There are 15  . 10  slither away. What is 15 minus 10? <u>5</u>	$\underline{15 - 10 = 5}$
4) I buy 13  . I eat 9  . How many do I have now? <u>4</u>	$\underline{13 - 9 = 4}$
5) Sally catches 12  . Frazer catches 9  . How many more has Sally got? <u>3</u>	$\underline{12 - 9 = 3}$
6) There are 14  . 3  blow away. How many are left? <u>11</u>	$\underline{14 - 3 = 11}$