












Name _____

Date _____



SUBTRACTION PROBLEMS TO 20 SHEET 1UK












	WORKING OUT
1) Newton has 15  . Frazer has 12  . What is the difference? _____	
2) There are 17  . 10  fly away. How many  are left? _____	
3) A shop has 16  . 8  are sold. What is 16 minus 8? _____	
4) Captain reads 18  . Tyger reads 4  . How many more books has Captain read? _____	
5) I have £20. I spend £8. How much money do I have left? £ _____	
6) I buy 14  . I eat 9  . How many do I have left? _____	

Name

Date



SUBTRACTION PROBLEMS TO 20 SHEET 1UK ANSWERS

	WORKING OUT
1) Newton has 15  . Frazer has 12  . What is the difference? <u>3</u>	$\underline{15 - 12 = 3}$
2) There are 17  . 10  fly away. How many  are left? <u>7</u>	$\underline{17 - 10 = 7}$
3) A shop has 16  . 8  are sold. What is 16 minus 8? <u>8</u>	$\underline{16 - 8 = 8}$
4) Captain reads 18  . Tyger reads 4  . How many more books has Captain read? <u>14</u>	$\underline{18 - 4 = 14}$
5) I have £20. I spend £8. How much money do I have left? £ <u>12</u>	$\underline{20 - 8 = 12}$
6) I buy 14  . I eat 9  . How many do I have left? <u>5</u>	$\underline{14 - 9 = 5}$