











Name

Date



SUBTRACTION PROBLEMS TO 20 SHEET 2











	WORKING OUT
1)  costs \$16. I have \$10. How much more money do I need? \$_____	
2) There are 13  on the beach. 8  are washed away. How many are left? _____	
3) Sally has 17  . Newton has 9  . What is the difference? _____	
4) A shop has 20  . 5  are sold. How many are left? _____	
5) There are 16  on a log. 11  roll off. How many  are still on the log? _____	
6) Captain has 19¢. He spends 12¢. What is 19¢ minus 12¢? _____ ¢	

Name

Date



SUBTRACTION PROBLEMS TO 20 SHEET 2 ANSWERS

	WORKING OUT
1) A  costs \$16. I have \$10. How much more money do I need? \$ <u>6</u>	$\underline{16 - 10 = 6}$
2) There are 13  on the beach. 8  are washed away. How many are left? <u>5</u>	$\underline{13 - 8 = 5}$
3) Sally has 17  . Newton has 9  . What is the difference? <u>8</u>	$\underline{17 - 9 = 8}$
4) A shop has 20  . 5  are sold. How many are left? <u>15</u>	$\underline{20 - 5 = 15}$
5) There are 16  on a log. 11  roll off. How many  are still on the log? <u>5</u>	$\underline{16 - 11 = 5}$
6) Captain has 19¢. He spends 12¢. What is 19¢ minus 12¢? <u>7</u> ¢	$\underline{19 - 12 = 7}$