











Name _____

Date _____



SUBTRACTION PROBLEMS TO 20 SHEET 2UK











	WORKING OUT
1)  costs £16. I have £10. How much more money do I need? £ _____	
2) There are 13  on the beach. 8  are washed away. How many are left? _____	
3) Sally has 17  . Newton has 9  . What is the difference? _____	
4) A shop has 20  . 5  are sold. How many are left? _____	
5) There are 16  on a log. 11  roll off. How many  are still on the log? _____	
6) Captain has 19p. He spends 12p. What is 19p minus 12p? _____ p	

Name

Date



SUBTRACTION PROBLEMS TO 20 SHEET 2UK ANSWERS

	WORKING OUT
1) A  costs £16. I have £10. How much more money do I need? £ <u>6</u>	<u>$16 - 10 = 6$</u>
2) There are 13  on the beach. 8  are washed away. How many are left? <u>5</u>	<u>$13 - 8 = 5$</u>
3) Sally has 17  . Newton has 9  . What is the difference? <u>8</u>	<u>$17 - 9 = 8$</u>
4) A shop has 20  . 5  are sold. How many are left? <u>15</u>	<u>$20 - 5 = 15$</u>
5) There are 16  on a log. 11  roll off. How many  are still on the log? <u>5</u>	<u>$16 - 11 = 5$</u>
6) Captain has 19p. He spends 12p. What is 19p minus 12p? <u>7</u> p	<u>$19 - 12 = 7$</u>