

































## SUBTRACTION PROBLEMS TO 20 SHEET 3

|   | WORKING OUT |
|---|-------------|
| 1) Sally buys 17  . She eats 13  . <p>How many  are left? _____</p>            |             |
| 2) There are 19  in a parking lot.<br>8  drive away.<br>What is 19 minus 8? _____   |             |
| 3) Captain finds 18  . <p>Frazer finds 9 .</p> <p>What is the difference? _____</p>   |             |
| 4) I have \$15. I spend \$11.<br>How much money do I have left? \$ _____  |             |
| 5) A music shop has 20  . <p>14  are sold.<br/>How many are left? _____</p>   |             |
| 6) There are 16  . <p>7  slither away.<br/>How many  are left? _____</p> |             |
| 7) I have 13  . I spend 8  . <p>How many  do I have now? _____</p>       |             |



# SUBTRACTION PROBLEMS TO 20 SHEET 3 ANSWERS

|  | WORKING OUT                     |
|--|---------------------------------|
| 1) Sally buys 17  . She eats 13  .<br>How many  are left? _____           | <u><math>17 - 13 = 4</math></u> |
| 2) There are 19  in a parking lot.<br>8  drive away.<br>What is 19 minus 8? _____  | <u><math>19 - 8 = 11</math></u> |
| 3) Captain finds 18  .<br>Frazer finds 9  .<br>What is the difference? _____   | <u><math>18 - 9 = 9</math></u>  |
| 4) I have \$15. I spend \$11.<br>How much money do I have left? \$ _____   | <u><math>15 - 11 = 4</math></u> |
| 5) A music shop has 20  .<br>14  are sold.<br>How many are left? _____   | <u><math>20 - 14 = 6</math></u> |
| 6) There are 16  .<br>7  slither away.<br>How many  are left? _____ | <u><math>16 - 7 = 9</math></u>  |
| 7) I have 13  . I spend 8  .<br>How many  do I have now? _____      | <u><math>13 - 8 = 5</math></u>  |