





## SUBTRACTION PROBLEMS TO 20 SHEET 3UK













	WORKING OUT
1) Sally buys 17  . She eats 13  . How many  are left? _____	
2) There are 19  in a parking lot. 8  drive away. What is 19 minus 8? _____	
3) Captain finds 18  . Frazer finds 9  . What is the difference? _____	
4) I have £15. I spend £11. How much money do I have left? £ _____	
5) A music shop has 20  . 14  are sold. How many are left? _____	
6) There are 16  . 7  slither away. How many  are left? _____	

Name

Date



# SUBTRACTION PROBLEMS TO 20 SHEET 3UK ANSWERS

	WORKING OUT
1) Sally buys 17  . She eats 13  . How many  are left? _____	$\underline{17 - 13 = 4}$
2) There are 19  in a parking lot. 8  drive away. What is 19 minus 8? _____	$\underline{19 - 8 = 11}$
3) Captain finds 18  . Frazer finds 9  . What is the difference? _____	$\underline{18 - 9 = 9}$
4) I have £15. I spend £11. How much money do I have left? £ _____	$\underline{15 - 11 = 4}$
5) A music shop has 20  . 14  are sold. How many are left? _____	$\underline{20 - 14 = 6}$
6) There are 16  . 7  slither away. How many  are left? _____	$\underline{16 - 7 = 9}$