

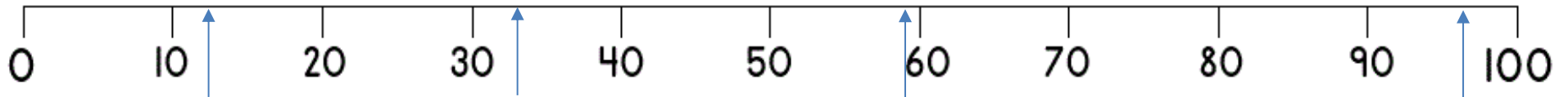
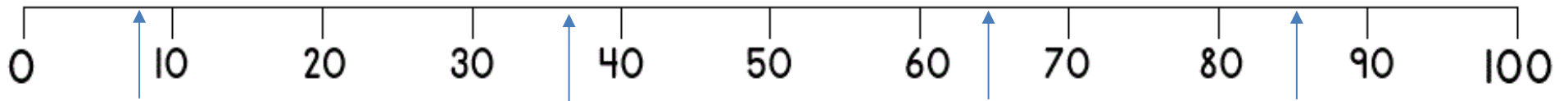
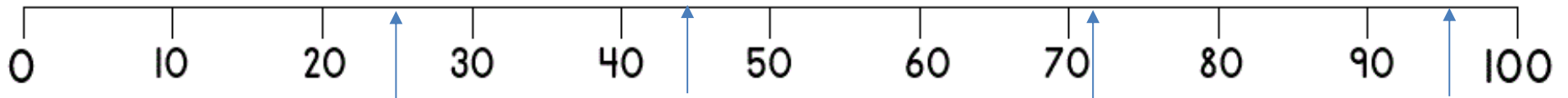
Name _____

Date _____




NUMBER LINE 0 TO 100 SHEET 4

Estimate the values of the arrows on each of these number lines.



Name

Date



NUMBER LINE 0 TO 100 SHEET 4 ANSWERS

As these are estimation questions, you can decide what you want the estimation error to be. For example, you may decide to award an answer correct if it is either the answer shown, or one more / one less of the answer.

