

Name \_\_\_\_\_

Date \_\_\_\_\_



# CHRISTMAS SQUARE ADDING PUZZLE 3

Each picture below has a value shown in the boxes below.



5



3



















1



4

Work out the total of each horizontal and vertical line of the puzzle.

= 9

= \_\_\_\_\_

= \_\_\_\_\_

= \_\_\_\_\_

= \_\_\_\_\_

= \_\_\_\_\_

= \_\_\_\_\_

= \_\_\_\_\_



Name

Date



# CHRISTMAS SQUARE ADDING PUZZLE 3 ANSWERS

Each picture below has a value shown in the boxes below.



5



3



















1



4

Work out the total of each horizontal and vertical line of the puzzle.

				= 9
				= <u>17</u>
				= <u>13</u>
				= <u>13</u>
= <u>17</u>	= <u>9</u>	= <u>11</u>	= <u>15</u>	