

Name \_\_\_\_\_

Date \_\_\_\_\_



# CHRISTMAS SQUARE ADDING PUZZLE 4

Each picture below has a value shown in the boxes below.



6



2



















4



3

Work out the total of each horizontal and vertical line of the puzzle.

= 12

= \_\_\_\_\_

= \_\_\_\_\_

= \_\_\_\_\_

= \_\_\_\_\_

= \_\_\_\_\_

= \_\_\_\_\_

= \_\_\_\_\_


Name

Date



















# CHRISTMAS SQUARE ADDING PUZZLE 4 ANSWERS

Each picture below has a value shown in the boxes below.



Work out the total of each horizontal and vertical line of the puzzle.

				= 12
				= <u>18</u>
				= <u>13</u>
				= <u>17</u>
= <u>13</u>	= <u>15</u>	= <u>16</u>	= <u>16</u>	