

Name

Date



CHRISTMAS SQUARE ADDING PUZZLE 6

Each picture below has a missing value between 1 and 4.

























Work out the total of each picture, given the totals of the horizontal and vertical lines of the puzzle.

Fill in the boxes above with the correct numbers.

| | | | | |
|---|---|---|---|------|
|  |  |  |  | = 10 |
|  |  |  |  | = 9 |
|  |  |  |  | = 11 |
|  |  |  |  | = 10 |
| = 13 | = 12 | = 9 | = 6 | |

Name

Date



CHRISTMAS SQUARE ADDING PUZZLE 6 ANSWERS

Each picture below has a missing value between 1 and 4.


3

















4

2

1

Work out the total of each picture, given the totals of the horizontal and vertical lines of the puzzle.

Fill in the boxes above with the correct numbers.

| | | | | |
|---|---|---|---|------|
|  |  |  |  | = 10 |
|  |  |  |  | = 9 |
|  |  |  |  | = 11 |
|  |  |  |  | = 10 |
| = 13 | = 12 | = 9 | = 6 | |